

Dividing By Multiples of 10

Self-Check: Questions 15–16

15. Compute the missing quantities.

A. $2 \times 30 =$ _____

B. $400 \times 50 =$ _____

$30 \times 2 =$ _____

$50 \times 400 =$ _____

$60 \div 2 =$ _____

$20,000 \div 400 =$ _____

$60 \div 30 =$ _____




$20,000 \div 50 =$ _____

16. Use mental math to solve the division problems.

A. $490 \div 70 =$ _____

B. $40,000 \div 80 =$ _____

Use the Self-Check questions and the menu to choose practice for dividing numbers that are multiple of tens.

| Workshop Menu | | | |
|----------------|--|---|---|
| Can I Do This? | ▲ Working On It!  I could use some extra help. | ● Getting It!  I just need some more practice. | ■ Got It!  I'm ready for a challenge. |
| | Divide with numbers that are multiples of 10. | Questions 17–19 | Questions 18–20 |