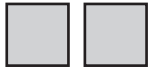
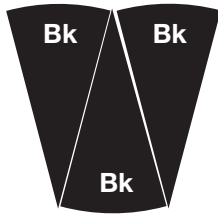


3. Show the unit whole.




A. Here is $\frac{1}{3}$ of a set of tiles. Draw the whole set.



B. Here is $\frac{3}{6}$ of a design. Draw what the whole design could look like.



Use the Self-Check questions to choose practice with showing proper and improper fractions and unit wholes.

Workshop Menu			
Can I Do This?	▲ Working On It! I could use some extra help. 	● Getting It! I just need some more practice. 	■ Got It! I'm ready for a challenge. 
Show and name proper and improper fractions. Recognize that equal fractional parts of a whole are the same size.	Questions 4–6, 11–13, 18	Questions 5–8, 11–14, 18–19	Questions 9–20
Show the unit whole if the fractional part is given.	Questions 21–22	Questions 21–23	Questions 22–26