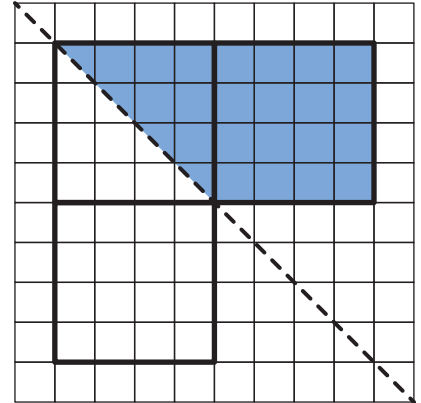


V Problem Solve with Area

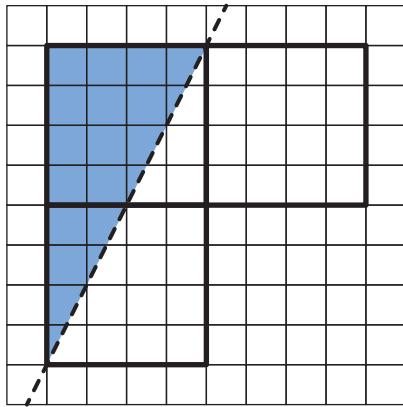


1. This shape is made of 3 big squares. Show or tell how you know the area of the shaded part is equal to the area of the part that is not shaded.

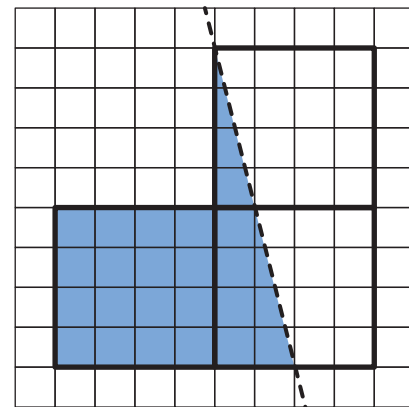


2. Find the area of the shaded part of each figure.

A.



B.



- C. Show or tell the strategy you used to find the area in Question B.