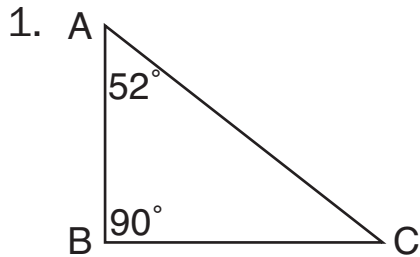
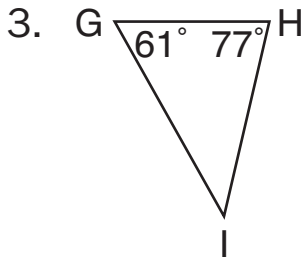
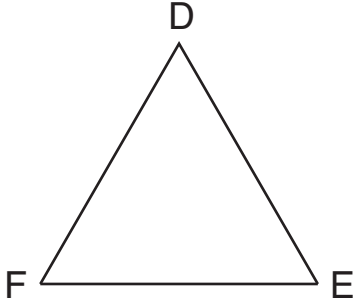


**K** What's Your Angle

Find the missing angle measurements.



2.  $\angle D$ ,  $\angle E$ , and  $\angle F$  have the same measurement.



4.  $\angle J$  and  $\angle K$  have the same measurement.

