


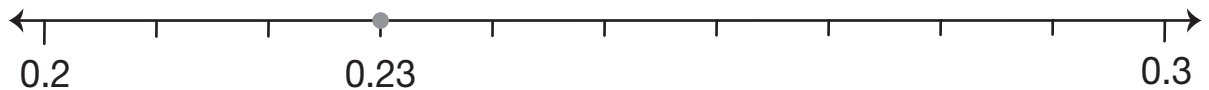
Decimal Grids: Hundredths

1. **A.** Shade twenty-three hundredths of the grid.




B. Write twenty-three hundredths as a decimal fraction.

Grace shows the decimal 0.23 on a number line. Since she knows that 0.23 is between two tenths and three tenths she uses these decimals to label the ends of her number line.



Grace used a dot to show the location of twenty-three hundredths.

2. **A.** Shade $\frac{47}{100}$ of the grid.



B. Write $\frac{47}{100}$ as a decimal fraction.