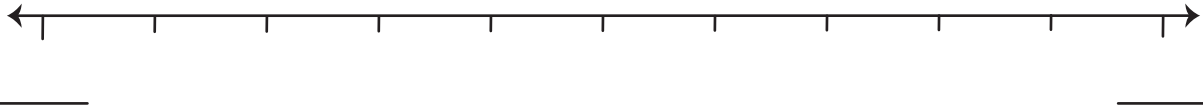



- C.** Use Grace's strategy to locate  $\frac{47}{100}$  on the number line. First decide between which tenths the decimal is located. Label the endpoints of the number line with these tenths. Then place a dot on the number line to show the location of the decimal.



- D.** Name the fraction of the grid that is **not** shaded. Write a decimal fraction.

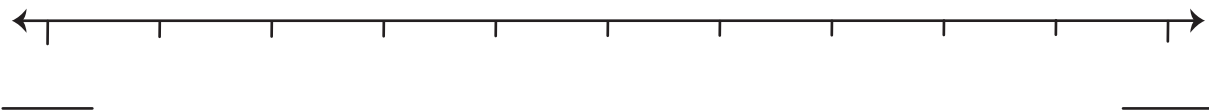
- 3. A.** Shade sixty-eight hundredths of the grid.



- B.** Write sixty-eight hundredths as a decimal fraction.

- C.** Use expanded form to represent sixty-eight hundredths.

- D.** Locate sixty-eight hundredths on the number line.



- E.** Name the fraction of the grid that is **not** shaded. Write a decimal fraction and a number sentence in expanded form.