



3. **A.** Shade 0.27.




B. Shade 0.127.




C. Write $<$, $>$, or $=$ to make this number sentence true: $0.27 \bigcirc 0.127$.

4. **A.** Shade 0.4.



B. Shade 0.345.



C. Write $<$, $>$, or $=$ to make this number sentence true: $0.4 \bigcirc 0.345$.