



**3.** Roberto runs 0.8 of a mile to the ball field and then 0.6 of a mile around the field.

**A.** Does Roberto run more or less than one mile?

**B.** How far does he run in all? Use the grids to add.





**Use these grids to help solve the following addition problems.**

**4.**  $0.6 + 0.26 =$  \_\_\_\_\_ **5.**  $0.45 + 0.47 =$  \_\_\_\_\_

Estimate \_\_\_\_\_

Estimate \_\_\_\_\_



**6.** Show how to solve the problem from Question 5 on the number line.

