





**7.**  $0.67 + 1.09 =$  \_\_\_\_\_ (Hint: Use both grids.)

Estimate \_\_\_\_\_





**8.**  $0.3 + 0.87 =$  \_\_\_\_\_

Estimate \_\_\_\_\_



**9.**  $1.47 + 0.03 =$  \_\_\_\_\_

Estimate \_\_\_\_\_



**10.** Show or tell how to use your estimate to tell if your answer to Question 9 is reasonable.