




Homework

Use the models to represent and solve the addition problems.


1. $0.2 + 0.7 =$ _____

Estimate _____




2. $0.65 + 0.3 =$ _____

Estimate _____




3. $0.42 + 0.4 =$ _____

Estimate _____



4. $0.21 + 0.72 =$ _____

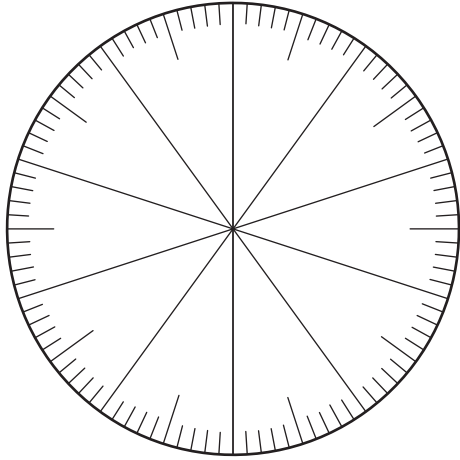
Estimate _____



Name _____ Date _____

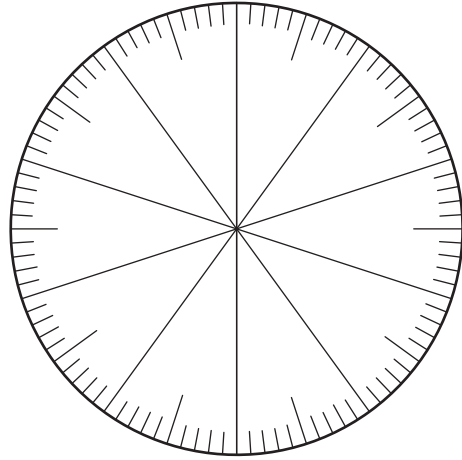
5. $0.7 + 0.16 =$ _____

Estimate _____



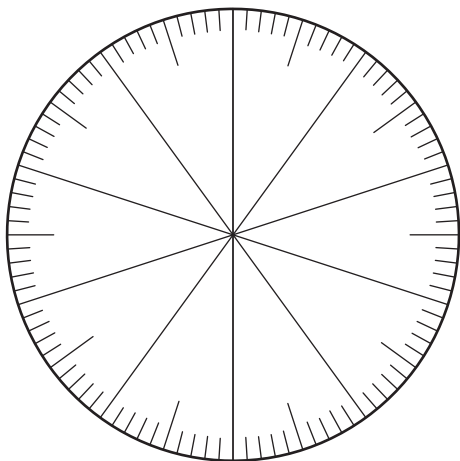
6. $0.95 + 0.03 =$ _____

Estimate _____



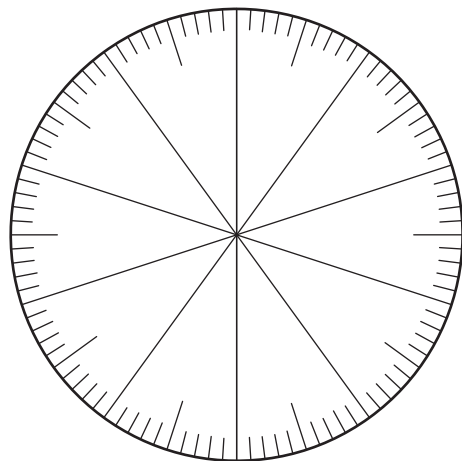
7. $0.2 + 0.35 =$ _____

Estimate _____



8. $0.1 + 0.09 =$ _____

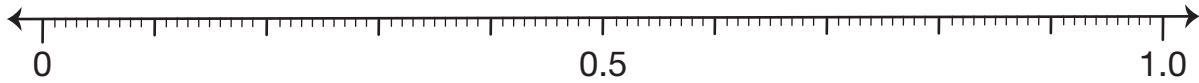
Estimate _____



Name _____ Date _____

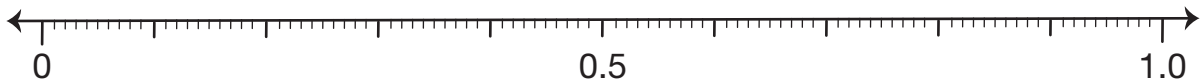
9. $0.63 + 0.08 =$ _____

Estimate _____



10. $0.37 + 0.020 =$ _____

Estimate _____



11. Use base-ten shorthand to represent and solve $1.19 + 1.09$.

Number sentence _____

12. Explain how you know your answer to Question 11 is reasonable.

