




# Homework

Use the models to represent and solve the addition problems.


1.  $0.2 + 0.7 =$  \_\_\_\_\_

Estimate \_\_\_\_\_




2.  $0.65 + 0.3 =$  \_\_\_\_\_

Estimate \_\_\_\_\_



3.  $0.42 + 0.4 =$  \_\_\_\_\_

Estimate \_\_\_\_\_



4.  $0.21 + 0.72 =$  \_\_\_\_\_

Estimate \_\_\_\_\_

