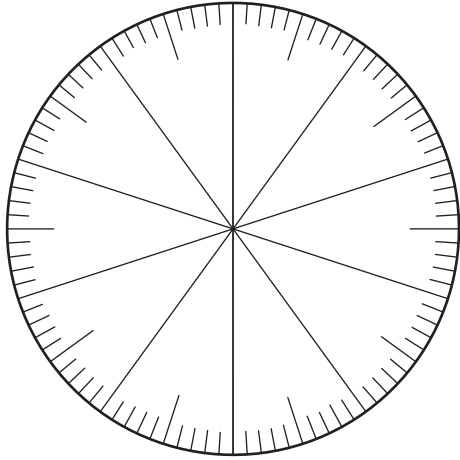


Name _____ Date _____

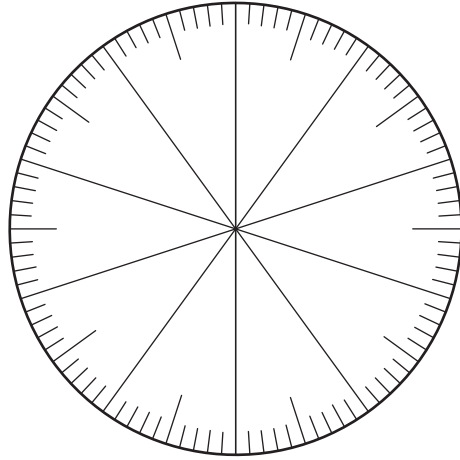
5. $0.7 + 0.16 =$ _____

Estimate _____



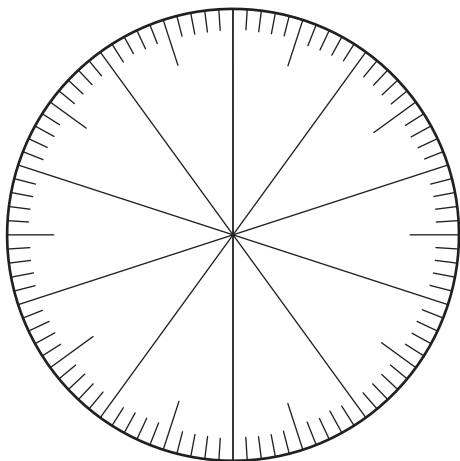
6. $0.95 + 0.03 =$ _____

Estimate _____



7. $0.2 + 0.35 =$ _____

Estimate _____



8. $0.1 + 0.09 =$ _____

Estimate _____

