


Use the grids to solve these subtraction problems.


5. $0.6 - 0.08 =$ _____

Estimate _____




6. $0.95 - 0.7 =$ _____

Estimate _____




7. $0.28 - 0.09 =$ _____

Estimate _____



8. $0.12 - 0.08 =$ _____

Estimate _____



9. Show how to solve Question 8 on the number line.

