




Homework

Use the models to represent and solve the subtraction problems.


1. $0.8 - 0.2 =$ _____

Estimate _____




2. $0.88 - 0.06 =$ _____

Estimate _____




3. $0.74 - 0.34 =$ _____

Estimate _____



4. $0.19 - 0.09 =$ _____

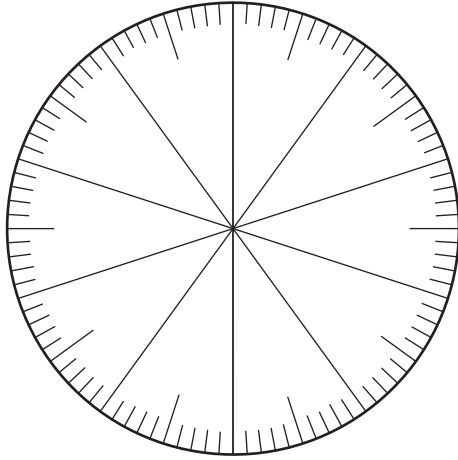
Estimate _____



Name _____ Date _____

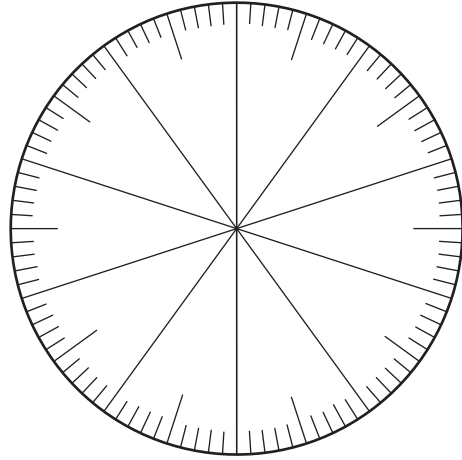
5. $0.95 - 0.27 =$ _____

Estimate _____



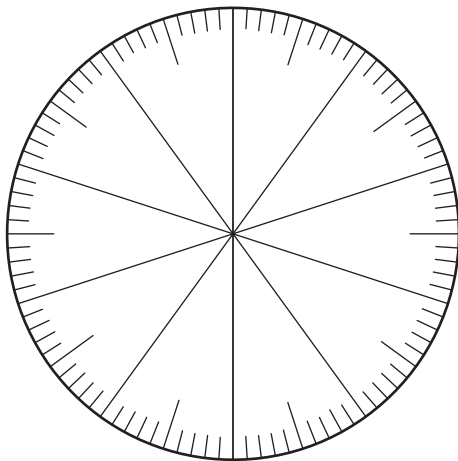
6. $0.3 - 0.15 =$ _____

Estimate _____



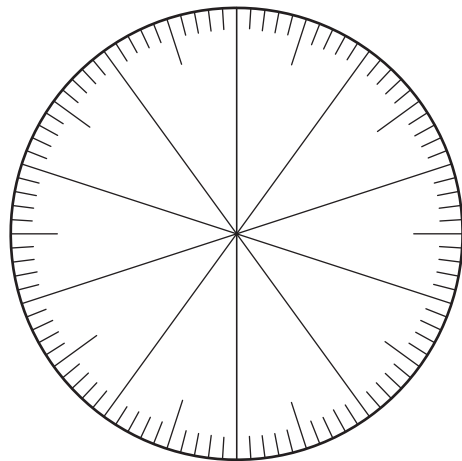
7. $0.5 - 0.28 =$ _____

Estimate _____



8. $0.3 - 0.06 =$ _____

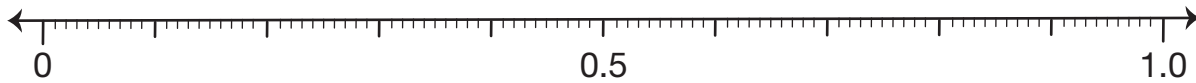
Estimate _____



Name _____ Date _____

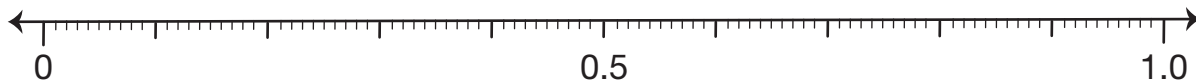
9. $0.85 - 0.5 =$ _____

Estimate _____



10. $0.88 - 0.06 =$ _____

Estimate _____



11. Use base-ten shorthand to represent and solve $1.67 - 1.5$.

Number sentence _____

12. Explain how you know your answer to Question 11 is reasonable.

