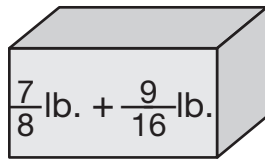
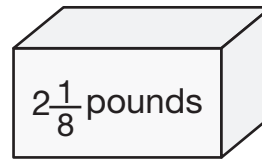


- 6.** Mr. Moreno is packing paperback books in boxes to ship to another school.



Box A



Box B

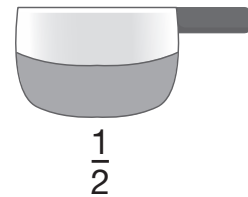
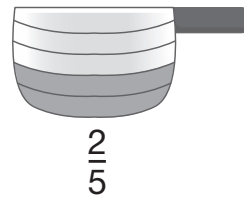
- A.** Estimate the weight of the books in Box A. Show or tell how you decided.
- B.** Is the weight of both boxes over or under 4 pounds? Do not find an exact answer. Show or tell how you decided.

Add and Subtract

- 7.** Ana and Shannon are baking. Shannon adds $\frac{2}{5}$ cup sugar to $\frac{1}{2}$ cup brown sugar.



$2 + 1 = 3$ and $5 + 2 = 7$,
so I think $\frac{2}{5} + \frac{1}{2} = \frac{3}{7}$.
We have a little less than
 $\frac{1}{2}$ cup of sugar.



- A.** Do you agree with Shannon? If you do not, explain why.